



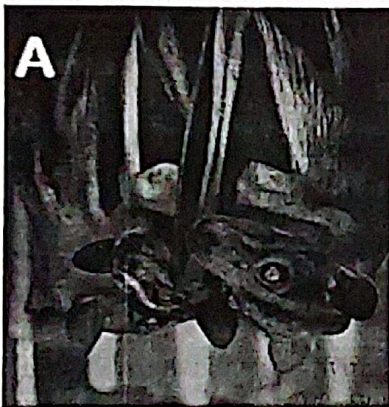
BOWEN UNIVERSITY, IWO
COLLEGE OF AGRICULTURE ENGINEERING AND SCIENCE
PURE AND APPLIED BIOLOGY PROGRAMME

PAB 411: WILDLIFE MANAGEMENT AND CONSERVATION
2021/2022 FIRST SEMESTER EXAMINATION
THEORY OF PRACTICALS

Answer all questions.

Time allowed: 45 minutes.

1. Provide the following information for the images A, B, C, D, E, and F below: (9 marks)
- (a) Common name
 - (b) Scientific name
 - (c) Conservation status



2. List six game reserves and their locations. (12 marks)
3. Mention any four international wildlife agencies. (4 marks)